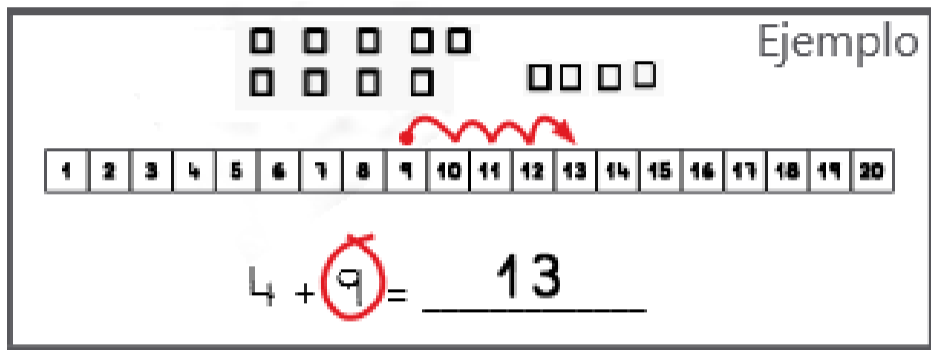


GUÍA REPASO HOGAR
PRIMEROS BÁSICOS
ESTRATEGIAS DE SUMA

RECUERDA QUE PARA SUMAR USANDO LA CINTA ENUMERADA, DEBES PARTIR POR EL NÚMERO MAYOR Y APLICAR LA ESTRATEGIA DE CONTEO. TAMBIÉN PUEDES DEJAR EL NÚMERO MAYOR EN TU MENTE Y LUEGO AVANZA LA CANTIDAD QUE INDIQUE EL SEGUNDO NÚMERO QUE ESTÁS SUMANDO.

Ejemplo

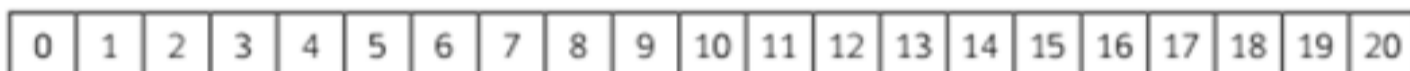


$4 + 9 = 13$


Ahora tú:

Usa la cinta numerada para sumar avanzando:

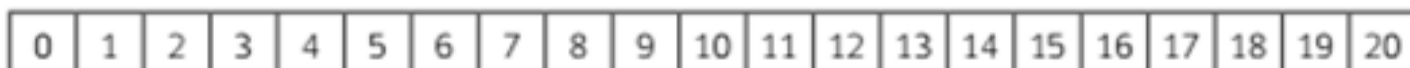
$$9 + 5 = \square$$



$$6 + 12 = \square$$



$$15 + 3 = \square$$



$$13 + 3 = \square$$

0	1	2	3	4	5	6	7	8	9	10	11	12	13	14	15	16	17	18	19	20
---	---	---	---	---	---	---	---	---	---	----	----	----	----	----	----	----	----	----	----	----

$$4 + 15 = \square$$

0	1	2	3	4	5	6	7	8	9	10	11	12	13	14	15	16	17	18	19	20
---	---	---	---	---	---	---	---	---	---	----	----	----	----	----	----	----	----	----	----	----

$$2 + 12 = \square$$

0	1	2	3	4	5	6	7	8	9	10	11	12	13	14	15	16	17	18	19	20
---	---	---	---	---	---	---	---	---	---	----	----	----	----	----	----	----	----	----	----	----

$$11 + 4 = \square$$

0	1	2	3	4	5	6	7	8	9	10	11	12	13	14	15	16	17	18	19	20
---	---	---	---	---	---	---	---	---	---	----	----	----	----	----	----	----	----	----	----	----

$$9 + 8 = \square$$

0	1	2	3	4	5	6	7	8	9	10	11	12	13	14	15	16	17	18	19	20
---	---	---	---	---	---	---	---	---	---	----	----	----	----	----	----	----	----	----	----	----

$$14 + 4 = \square$$

0	1	2	3	4	5	6	7	8	9	10	11	12	13	14	15	16	17	18	19	20
---	---	---	---	---	---	---	---	---	---	----	----	----	----	----	----	----	----	----	----	----